

Student Number	
Mark / 64	

Chemistry

**Final Examination
Preliminary Course • 2003**

General Instructions

- Reading time – 5 minutes
- Working time – 120 minutes
- Write using black or blue pen
- Draw diagrams using pencil
- Board-approved calculators may be used
- A Data Sheet and a Periodic Table are provided at the back of this paper
- Write your Student Number at the top of this page

Total Marks – 64





Part A – 10 marks

- Attempt Questions 1 – 10
- Allow about 10 minutes for this part

Part B – 54 marks

- Attempt Questions 11 – 23
- Allow about 110 minutes for this part

Allow about 10 minutes for this part

A  B  C  D 

correct

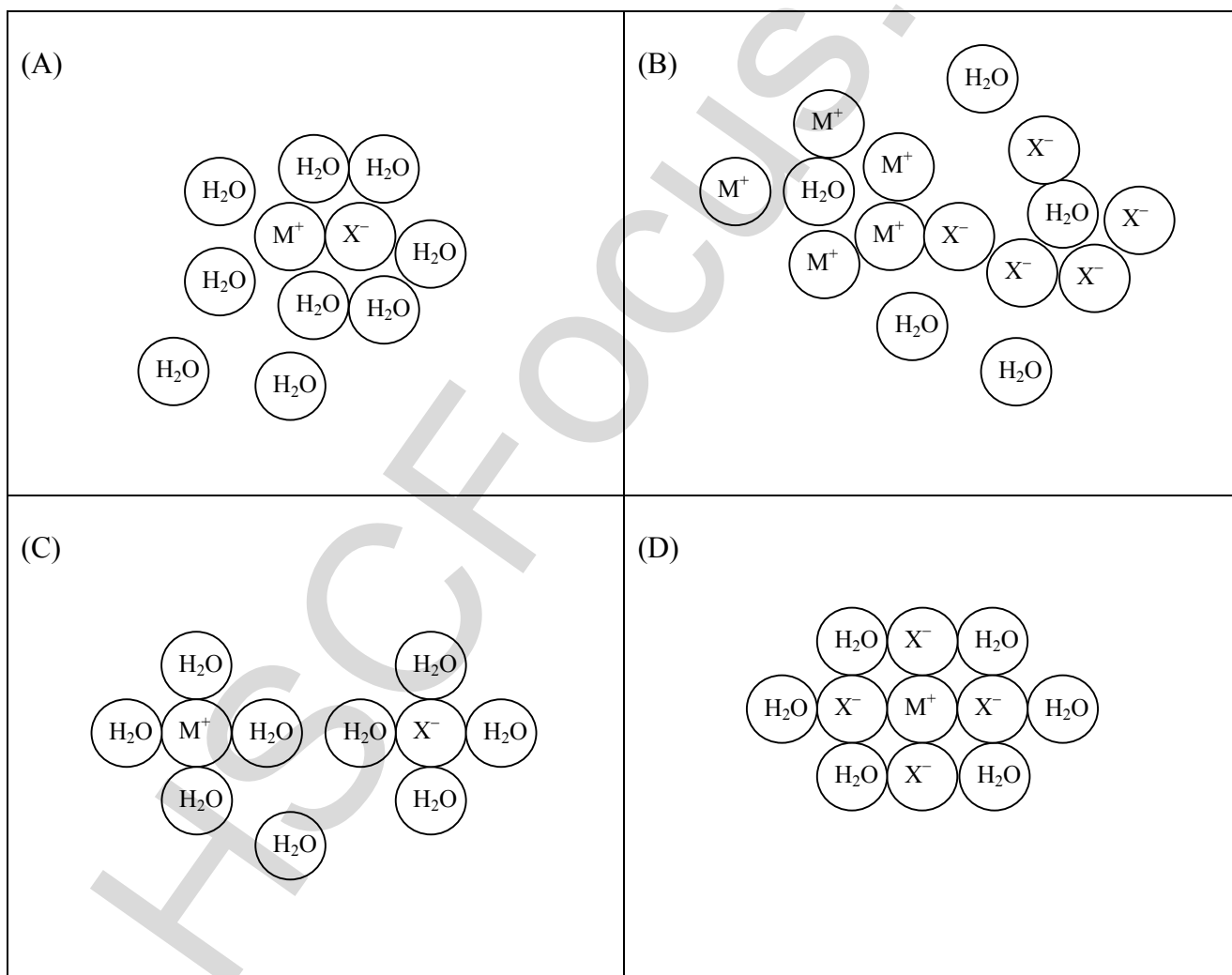
Page 1 of 17

► Mark your answers for Questions 1 – 10 in the Answer Box on page 1.

1 Which is a toxic gas pollutant from the incomplete combustion of petrol in cars?

- (A) ammonia
- (B) carbon monoxide
- (C) soot
- (D) carbon dioxide

2 Which diagram shows the complete dissolution of an ionic solid (M^+X^-) in water?



- 3 Which shows the correct percentage of water in the corresponding sphere?

	sphere	percentage water
(A)	atmosphere	0.5 – 10%
(B)	hydrosphere	90 – 94%
(C)	lithosphere	< 10%
(D)	biosphere (living matter)	45 – 90%

- 4 Which statement is true for a system undergoing an exothermic reaction?

- (A) The final energy content of the system is greater than the initial energy content.
- (B) The activation energy has a negative value.
- (C) The temperature decreases.
- (D) The ΔH has a negative value.

- 5 Organisms living in an aquatic habitat experience less temperature extremes than nearby organisms living on the land. Which factor explains the moderating effect of the water?

- (A) extensive hydrogen bonding
- (B) strong dispersion forces
- (C) high viscosity
- (D) high density

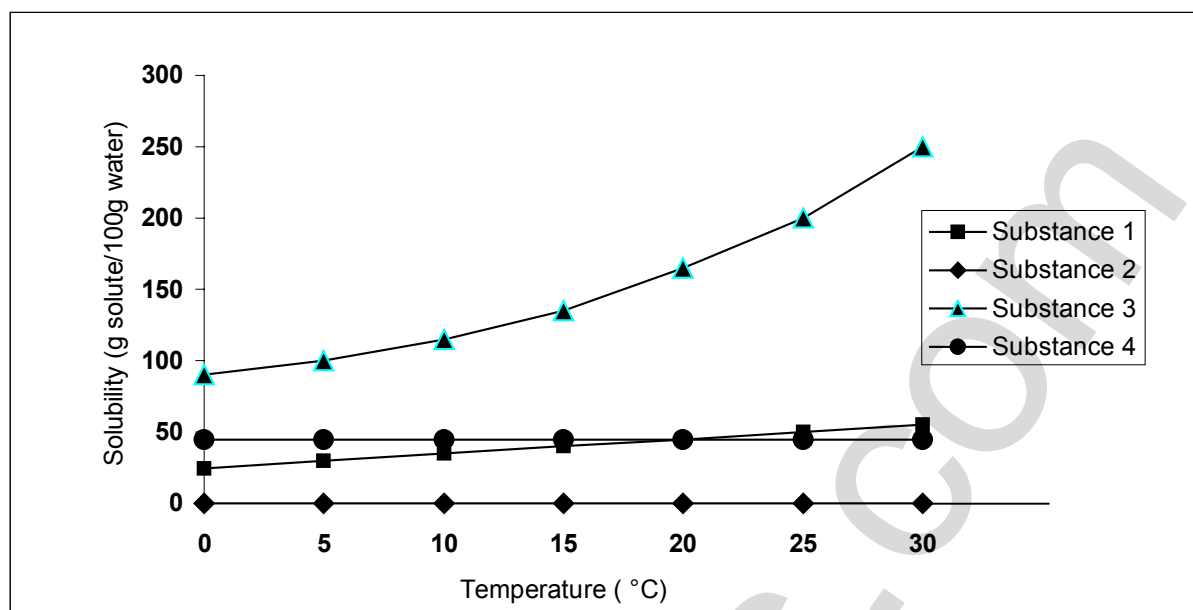
- 6 What is the mass of magnesium oxide (MgO) produced by burning 6.075 g of magnesium?

- (A) 0.250 g
- (B) 6.075 g
- (C) 10.075 g
- (D) 40.300 g

- 7 What is the mass of potassium hydroxide (KOH) needed to prepare 200 mL of a 0.25 mol L^{-1} solution?

- (A) 2.8 g
- (B) 28 g
- (C) 280 g
- (D) 2800 g

- 8 The graph shows the solubilities of four solid substances in water at different temperatures.



Which substance would be a covalent network solid?

- (A) Substance 1
(B) Substance 2
(C) Substance 3
(D) Substance 4
- 9 What is the number of molecules present in 22 g of CO_2 at 298 K and 100 kPa?
- (A) 3.0×10^{23}
(B) 6.0×10^{23}
(C) 12×10^{23}
(D) $6.0 \times 10^{11.5}$
- 10 A slight increase in temperature often causes a dramatic increase in the rate of a chemical reaction. Which statement best explains this effect?
- (A) The average frequency of collisions between particles increases.
(B) The ΔH for the reaction decreases.
(C) The activation energy is lowered.
(D) The number of molecules with energy greater than the activation energy increases.

Part B – 54 marks

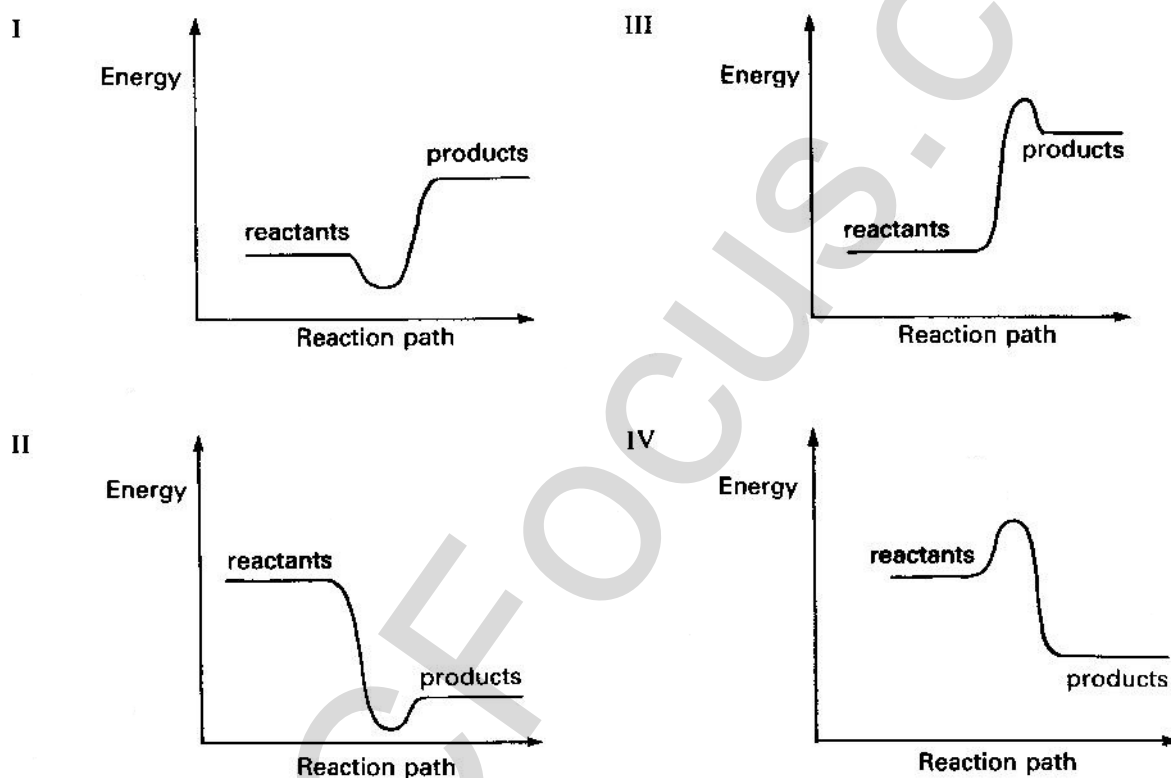
Attempt Questions 11 – 23

Allow about 110 minutes for this part

► **Show all relevant working in questions involving calculations.**

Question 11 (3 marks)

The graphs show the energy changes during the course of four different situations (I – IV)...



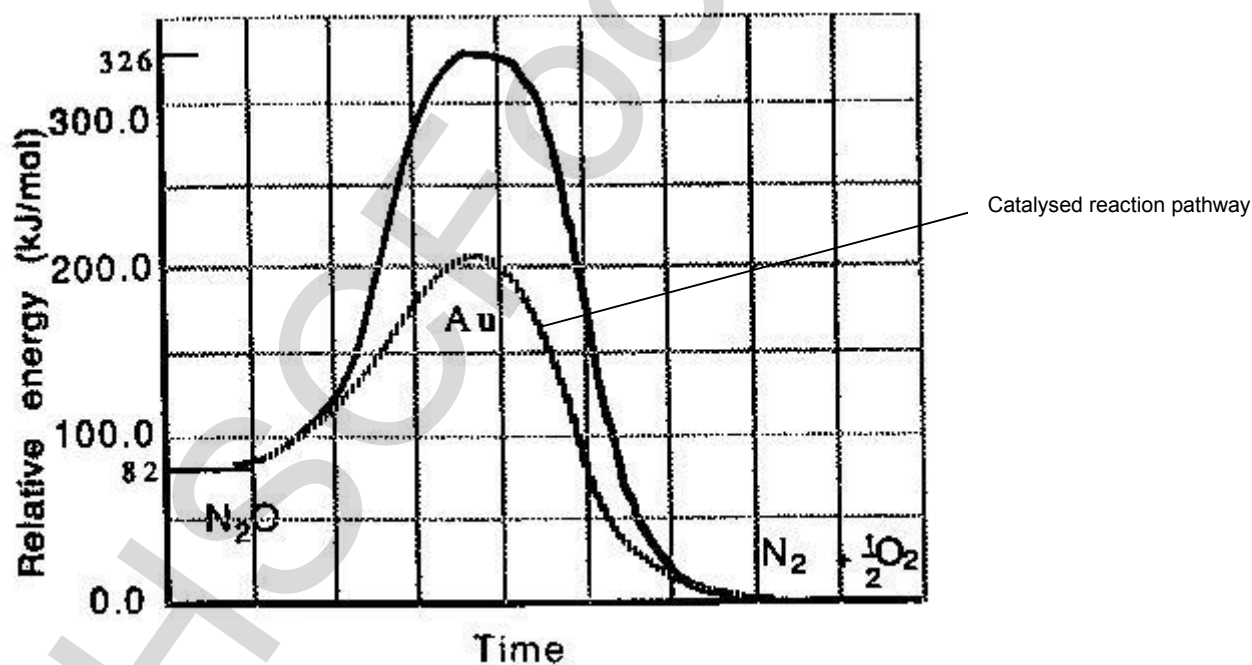
- (a) Which graph could correspond to the reaction: $\text{NO}_2(\text{g}) \rightarrow \frac{1}{2}\text{N}_2(\text{g}) + \text{O}_2(\text{g}) \quad \Delta H = -33.7 \text{ kJ mol}^{-1}$?
_____ (1 mark)
- (b) Which graph could correspond to the melting of ice? _____ (1 mark)
- (c) Which graph could correspond to the combustion of methane? _____ (1 mark)

Question 12 (4 marks)

- (a) Explain how fine coal dust in a coal mine can be an explosive hazard. **(2 marks)**


- (b) Suggest one safety feature adopted by industries to avoid dust explosions. **(1 mark)**

- (c) Dinitrogen monoxide can be thermally decomposed to nitrogen and oxygen.
The reaction is catalysed by gold... $\text{N}_2\text{O (g)} \rightarrow \text{N}_2 \text{(g)} + \frac{1}{2}\text{O}_2 \text{(g)} \quad \Delta H = -82 \text{ kJ mol}^{-1}$



What is the activation energy for the reverse reaction... $\text{N}_2 \text{(g)} + \frac{1}{2}\text{O}_2 \text{(g)} \rightarrow \text{N}_2\text{O (g)}$
in the absence of the gold catalyst? **(1 mark)**

Question 13 (3 marks)



A candle without a wick will not burn



A candle with a wick will burn readily

- (a) Identify two physical changes occurring during the burning of a candle. **(2 marks)**

- (b) Explain why only the candle with the wick burns. **(1 mark)**

Question 14 (6 marks)

- (a) Construct the Lewis electron dot structures for ammonia and water. **(2 marks)**


--	--

Question 14 continues on page 8.

Question 14 (continued)

- (b) Describe the shape of the hydrogen sulfide molecule and explain why hydrogen sulfide has this shape. **(2 marks)**

- (c) Draw a diagram of an ammonia molecule showing its correct shape. **(1 mark)**
Identify the shape. **(1 mark)**



Question 15 (3 marks)

- (a) Which of hydrogen sulfide and water has the higher boiling point? **(1 mark)**

- (b) Explain your answer to (a). **(2 marks)**

Question 16 (3 marks)

- (a) What property of water enables an insect to walk on water? **(1 mark)**

- (b) Explain the nature of the property of water identified in (a) in terms of intermolecular forces. **(2 marks)**

Question 17 (3 marks)

You have already done an experiment where you used water's ability to absorb heat to measure energy changes in reactions.

- (a) Identify or describe the apparatus you used to perform the experiment. **(1 mark)**

- (b) Identify one measurement required to do this experiment. **(1 mark)**

- (c) Write the equation you used to determine the amount of heat absorbed. **(1 mark)**

Question 18 (5 marks)

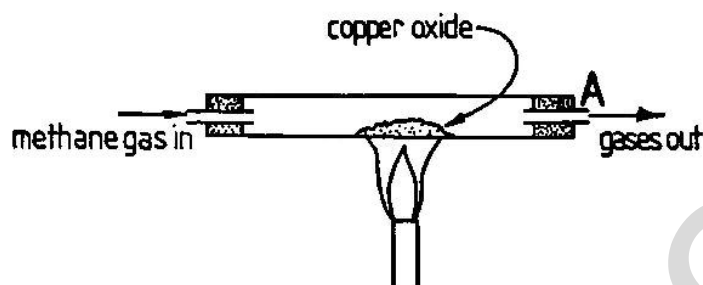
A cargo helicopter accidentally dropped 1200 kg of chemical in a pond containing 50,000 litres of water. When the chemical dissolved in the pond, the temperature increased.

- (a) How much heat was released to the water in the pond, if the water temperature in the pond increased from 15°C to 21°C? **(2 marks)**

- (b) Outline three implications (other than directly killing organisms) for aquatic life subjected to thermal pollution. **(3 marks)**

Question 19 (5 marks)

The diagram shows methane gas passing over heated copper(II) oxide reacting to produce copper metal and gaseous products of carbon dioxide and water vapour which leave the apparatus at A...



- (a) Write the balanced formulae equation for the reaction of copper(II) oxide with methane (CH_4). **(1 mark)**

- (b) If 15.9 g of copper(II) oxide is completely reacted, calculate the mass of copper metal formed. **(2 marks)**

- (c) Calculate the percentage of copper in the copper(II) oxide sample. **(1 mark)**

- (d) Calculate the volume of CO_2 produced at 25°C and 100 kPa from 15.9 g of copper(II) oxide. **(1 mark)**

Question 20 (4 marks)

- (a) Legislation states that the concentration of alcohol, $\text{C}_2\text{H}_5\text{OH}$, in the blood of an experienced driver of a motor car is not to exceed 0.05% (w/v).

Calculate the corresponding $\text{C}_2\text{H}_5\text{OH}$ concentration in the blood in moles per litre. **(2 marks)**

- (b) Identify a different measurement of concentration to that mentioned above (i.e. w/v) and describe a use for this measurement. **(2 marks)**

Question 21 (4 marks)

- (a) Calculate the mass of sodium sulfate required to prepare 50.0 mL of 0.150 mol L^{-1} solution. **(1 mark)**

- (b) What volume of this solution would you need to dilute, to prepare 125 mL of $0.0500 \text{ mol L}^{-1}$ solution? **(1 mark)**

- (c) What is the concentration of the sodium ions and sulfate ions in the $0.0500 \text{ mol L}^{-1}$ solution? **(2 marks)**

Question 22 (4 marks)

The table shows data for the compound hydrazine...

Composition	Hydrazine is a compound of nitrogen and hydrogen
Complete combustion of gaseous hydrazine at 400 K and 100 kPa	$\begin{array}{ccccccc} \text{hydrazine (g)} & + & \text{oxygen (g)} & \rightarrow & \text{nitrogen dioxide (g)} & + & \text{water (g)} \\ 1.0 \text{ L} & & 3.0 \text{ L} & & 2.0 \text{ L} & & 2.0 \text{ L} \end{array}$

- (a) Explain how the data for combustion illustrates Gay-Lussac's Law of Combining Gas Volumes. **(1 mark)**

- (b) Determine the molecular formula of hydrazine. Show all working. **(2 marks)**

- (c) What is the empirical formula of hydrazine? **(1 mark)**

Question 23 (7 marks)

2.08 g of barium chloride was dissolved in water to make 50.0 mL of solution and then added to 50.0 mL of an aqueous solution containing 2.84 g of sodium sulfate. A white precipitate formed.

- (a) Write the net ionic equation for the reaction forming the precipitate. **(1 mark)**
► Use the solubility table below to determine the identity of the precipitate.

ANION	CATION	COMPOUND
All	Group I metals	soluble
All	Ammonium, NH_4^+	soluble
Nitrate, NO_3^-	All	soluble
Acetate/ethanoate CH_3COO^-	All except Ag^+	soluble
Chloride, Cl^- Bromide, Br^- Iodide, I^-	Ag^+ , Pb^{2+} , Hg_2^{2+} , Cu^+	insoluble
	All others	soluble
Sulfate, SO_4^{2-}	Ca^{2+} , Sr^{2+} , Ba^{2+} , Pb^{2+} , Ag^+ , Hg_2^{2+}	insoluble
	All others	soluble
Sulfide, S^{2-}	Group I and II metals, NH_4^+	soluble
	All others	insoluble
Hydroxide, OH^-	Group I metals, NH_4^+ , Sr^{2+} , Ba^{2+}	soluble
	All others	insoluble
Carbonate, CO_3^{2-} Phosphate, PO_4^{3-} Sulfite, SO_3^{2-}	Group I metals, NH_4^+	soluble
	All others	insoluble

Question 23 continues on page 15

Question 23 (continued)

(b) What is the mass of the precipitate formed? Show working. **(4 marks)**

(c) Calculate the concentration (mol L^{-1}) of sulfate ions in the final solution. Show working. **(2 marks)**

HIGHER SCHOOL CERTIFICATE EXAMINATION
Chemistry

DATA SHEET

Avogadro constant, N_A	$6.022 \times 10^{23} \text{ mol}^{-1}$
Volume of 1 mole ideal gas: at 100 kPa and	
at 0°C (273.15 K)	22.71 L
at 25°C (298.15 K)	24.79 L
Ionisation constant for water at 25°C (298.15 K), K_w	1.0×10^{-14}
Specific heat capacity of water	$4.18 \times 10^3 \text{ J kg}^{-1} \text{ K}^{-1}$

Some useful formulae

$$\text{pH} = -\log_{10}[\text{H}^+]$$

$$\Delta H = -m C \Delta T$$

Some standard potentials

$\text{K}^+ + \text{e}^-$	\rightleftharpoons	K(s)	-2.94 V
$\text{Ba}^{2+} + 2\text{e}^-$	\rightleftharpoons	Ba(s)	-2.91 V
$\text{Ca}^{2+} + 2\text{e}^-$	\rightleftharpoons	Ca(s)	-2.87 V
$\text{Na}^+ + \text{e}^-$	\rightleftharpoons	Na(s)	-2.71 V
$\text{Mg}^{2+} + 2\text{e}^-$	\rightleftharpoons	Mg(s)	-2.36 V
$\text{Al}^{3+} + 3\text{e}^-$	\rightleftharpoons	Al(s)	-1.68 V
$\text{Mn}^{2+} + 2\text{e}^-$	\rightleftharpoons	Mn(s)	-1.18 V
$\text{H}_2\text{O} + \text{e}^-$	\rightleftharpoons	$\frac{1}{2}\text{H}_2(\text{g}) + \text{OH}^-$	-0.83 V
$\text{Zn}^{2+} + 2\text{e}^-$	\rightleftharpoons	Zn(s)	-0.76 V
$\text{Fe}^{2+} + 2\text{e}^-$	\rightleftharpoons	Fe(s)	-0.44 V
$\text{Ni}^{2+} + 2\text{e}^-$	\rightleftharpoons	Ni(s)	-0.24 V
$\text{Sn}^{2+} + 2\text{e}^-$	\rightleftharpoons	Sn(s)	-0.14 V
$\text{Pb}^{2+} + 2\text{e}^-$	\rightleftharpoons	Pb(s)	-0.13 V
$\text{H}^+ + \text{e}^-$	\rightleftharpoons	$\frac{1}{2}\text{H}_2(\text{g})$	0.00 V
$\text{SO}_4^{2-} + 4\text{H}^+ + 2\text{e}^-$	\rightleftharpoons	$\text{SO}_2(\text{aq}) + 2\text{H}_2\text{O}$	0.16 V
$\text{Cu}^{2+} + 2\text{e}^-$	\rightleftharpoons	Cu(s)	0.34 V
$\frac{1}{2}\text{O}_2(\text{g}) + \text{H}_2\text{O} + 2\text{e}^-$	\rightleftharpoons	2OH^-	0.40 V
$\text{Cu}^+ + \text{e}^-$	\rightleftharpoons	Cu(s)	0.52 V
$\frac{1}{2}\text{I}_2(\text{s}) + \text{e}^-$	\rightleftharpoons	I^-	0.54 V
$\frac{1}{2}\text{I}_2(\text{aq}) + \text{e}^-$	\rightleftharpoons	I^-	0.62 V
$\text{Fe}^{3+} + \text{e}^-$	\rightleftharpoons	Fe^{2+}	0.77 V
$\text{Ag}^+ + \text{e}^-$	\rightleftharpoons	Ag(s)	0.80 V
$\frac{1}{2}\text{Br}_2(\text{l}) + \text{e}^-$	\rightleftharpoons	Br^-	1.08 V
$\frac{1}{2}\text{Br}_2(\text{aq}) + \text{e}^-$	\rightleftharpoons	Br^-	1.10 V
$\frac{1}{2}\text{O}_2(\text{g}) + 2\text{H}^+ + 2\text{e}^-$	\rightleftharpoons	H_2O	1.23 V
$\frac{1}{2}\text{Cl}_2(\text{g}) + \text{e}^-$	\rightleftharpoons	Cl^-	1.36 V
$\frac{1}{2}\text{Cr}_2\text{O}_7^{2-} + 7\text{H}^+ + 3\text{e}^-$	\rightleftharpoons	$\text{Cr}^{3+} + \frac{7}{2}\text{H}_2\text{O}$	1.36 V
$\frac{1}{2}\text{Cl}_2(\text{aq}) + \text{e}^-$	\rightleftharpoons	Cl^-	1.40 V
$\text{MnO}_4^- + 8\text{H}^+ + 5\text{e}^-$	\rightleftharpoons	$\text{Mn}^{2+} + 4\text{H}_2\text{O}$	1.51 V
$\frac{1}{2}\text{F}_2(\text{g}) + \text{e}^-$	\rightleftharpoons	F^-	2.89 V

Aylward and Findlay, *SI Chemical Data* (5th Edition) is the principal source of data for this examination paper. Some data may have been modified for examination purposes.

PERIODIC TABLE OF THE ELEMENTS

PERIODIC TABLE OF THE ELEMENTS														2 He 4.003 Helium			
KEY																	
		Atomic Number		Atomic Weight		Symbol of element											
		79 Au 197.0		Gold													
				Name of element													
1 H 1.008 Hydrogen	4 Be 9.012 Beryllium	21 Sc 44.96 Scandium	22 Ti 47.87 Titanium	23 V 50.94 Vanadium	24 Cr 52.00 Chromium	25 Mn 54.94 Manganese	26 Fe 55.85 Iron	27 Co 58.93 Cobalt	28 Ni 58.69 Nickel	29 Cu 63.55 Copper	30 Zn 65.39 Zinc	31 Ga 69.72 Gallium	32 Ge 72.61 Germanium	33 As 74.92 Arsenic	34 Se 78.96 Selenium	35 Br 79.90 Bromine	36 Kr 83.80 Krypton
3 Li 6.941 Lithium	12 Mg 24.31 Magnesium	39 Y 88.91 Yttrium	40 Zr 91.22 Zirconium	41 Nb 92.91 Niobium	42 Mo 95.94 Molybdenum	43 Tc [98.91] Technetium	44 Ru 101.1 Ruthenium	45 Rh 102.9 Rhodium	46 Pd 106.4 Palladium	47 Ag 107.9 Silver	48 Cd 112.4 Cadmium	49 In 114.8 Indium	50 Sn 118.7 Tin	51 Sb 121.8 Antimony	52 Te 127.6 Tellurium	53 I 126.9 Iodine	54 Xe 131.3 Xenon
55 Cs 132.9 Caesium	56 Ba 137.3 Barium	57-71 Lanthanides	72 Hf 178.5 Hafnium	73 Ta 180.9 Tantalum	74 W 183.8 Tungsten	75 Re 186.2 Rhenium	76 Os 190.2 Osmium	77 Ir 192.2 Iridium	78 Pt 195.1 Platinum	79 Au 197.0 Gold	80 Hg 200.6 Mercury	81 Tl 204.4 Thallium	82 Pb 207.2 Lead	83 Bi 209.0 Bismuth	84 Po [210.0] Polonium	85 At [210.0] Astatine	86 Rn [222.0] Radon
87 Fr [223.0] Francium	88 Ra [226.0] Radium	89-103 Actinides	104 Rf [261.1] Rutherfordium	105 Db [262.1] Dubnium	106 Sg [263.1] Seaborgium	107 Bh [264.1] Bohrium	108 Hs [265.1] Hassium	109 Mt [268] Meitnerium	110 Uun — Ununium	111 Uuu — Ununium	112 Uub — Unubium	113 Uu — Ununium	114 Uuq — Ununquadium	115 Uut — Ununtrium	116 Uuh — Ununhexium	117 Uus — Ununseptium	118 Uuo — Ununoctium